


Thousands, Hundreds, Tens and Ones

Name _____

Date _____

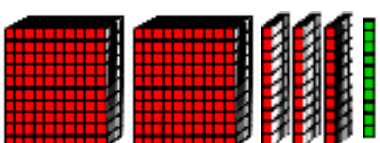
Count the groups of thousands, hundreds, tens, and ones. Then write the numbers.

(1)  □□□□
□□ (1) = _____


(2)  □□□□ (2) = _____

(3)  □□□□ (3) = _____

(4)  □□□□ (4) = _____

(5)  □□□□□□
□□ (5) = _____

(6)  □□□□ (6) = _____

(7)  □□□□□□
□□ (7) = _____