

# Thousands, Hundreds, Tens and Ones

Name \_\_\_\_\_


Date \_\_\_\_\_


Count the groups of thousands, hundreds, tens, and ones. Then write the numbers.


(1)  (1) = \_\_\_\_\_

(2)  (2) = \_\_\_\_\_

(3)  (3) = \_\_\_\_\_

(4)  (4) = \_\_\_\_\_

(5)  (5) = \_\_\_\_\_

(6)  (6) = \_\_\_\_\_

(7)  (7) = \_\_\_\_\_