



Thousands, Hundreds, Tens and Ones

Name _____

Date _____


Count the groups of thousands, hundreds, tens, and ones. Then write the numbers.

(1)  (1) = _____

(2)  (2) = _____

(3)  (3) = _____

(4)  (4) = _____

(5)  (5) = _____

(6)  (6) = _____

(7)  (7) = _____